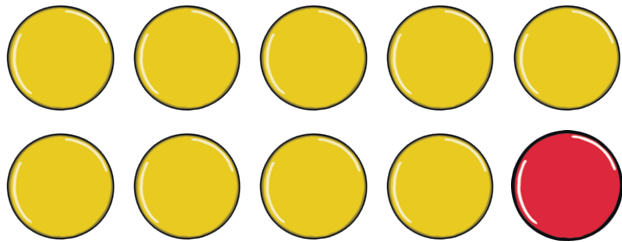
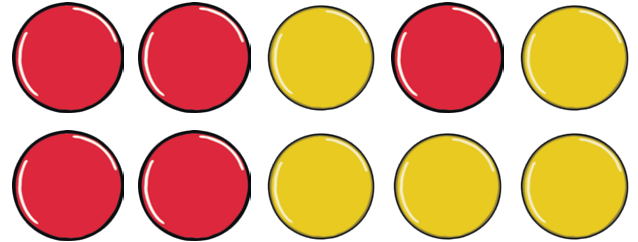


Number Bonds to 10

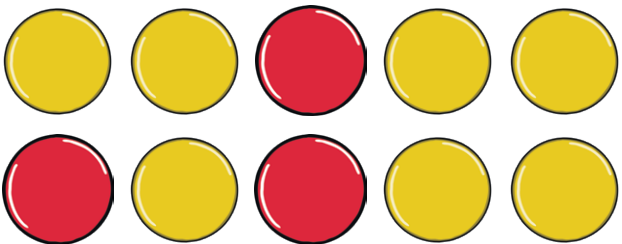
Look at the counters. Using two coloured pencils, can you show them on the ten-frames? Can you complete each number sentence?



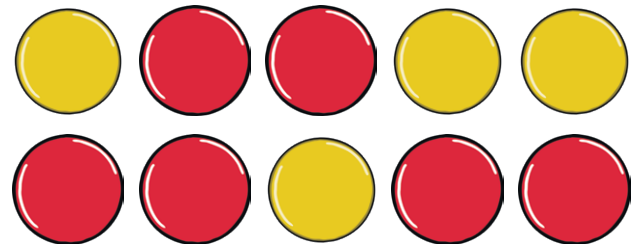
$$\boxed{9} + \boxed{} = \boxed{10}$$



$$\boxed{} + \boxed{} = \boxed{10}$$



$$\boxed{} + \boxed{} = \boxed{10}$$



$$\boxed{} + \boxed{} = \boxed{}$$

Look at the number sentences below. Can you draw the counters in the ten-frames to show the correct number bond to 10?

$$\boxed{2} + \boxed{8} = \boxed{10}$$

$$\boxed{10} + \boxed{0} = \boxed{10}$$